

How many days have passed this month?

🐣 **March**

Sunday	Monday	Tuesday	Wednesday	Thursday	Friday	Saturday
1	2	3	4	5	6	7
8	9					

Calendar Grid


	54¢
	45¢
	63¢
	36¢
	□
	□

Coin Collector

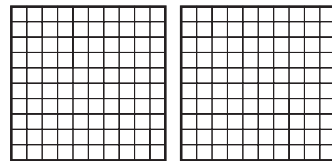
How many days have we been in school?

101	102	103	104	105	106	107	108	109	110
111	112	113	114	115	116	117			

Hundreds Grid



Bean Clock

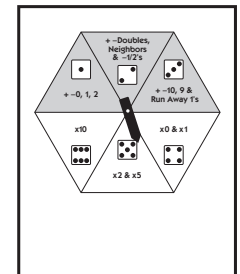


***Follow instructions as written in Supplement A5 Activity 4 for March, using a variety of strategies.**

$$\begin{array}{r} 265 \\ -17 \\ \hline \end{array}$$

The Base Ten Bank

Here's today's workout



Workout Wheel 2

